

JUNE 2005 PAPER 2

SECTION I

Answer ALL the questions in this section.

ALL working must be clearly shown.

June 2005 – Question 1

- (a) Calculate the EXACT value of

$$4\frac{1}{5} - \left(1\frac{1}{9} \times 3\right) \quad (3)$$

- (b) The table below shows Amanda's shopping bill. Some numbers were removed and replaced with letters.

Items	Quantity	Unit Price (\$)	Total Cost (\$)
Stickers	12	0.49	5.88
T-shirts	3	12.50	A
CD's	2	B	33.90
Posters	C	6.20	31.00
Total			108.28
15% VAT (to the nearest cent)			D

- (i) Calculate the values of A, B, C and D. (5)
- (ii) Amanda sold 6 of the 12 stickers, which she had bought, at 75 cents each, and the remaining stickers at 40 cents each.

Show, using calculations, whether Amanda made a profit or loss on buying and selling stickers. (3)

Total 11 marks

June 2005 – Question 2

- (a) Factorise

(i) $5a^2b + ab^2$ (2)

(ii) $9k^2 - 1$ (2)

(iii) $2y^2 - 5y + 2$ (2)

- (b) Expand and simplify
- $(2x + 5)(3x - 4)$
- (2)

- (c) Adam, Imran and Shakeel were playing a card game.

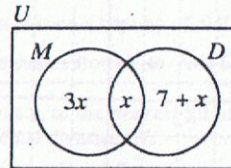
Adam scored x points
 Imran scored 3 points fewer than Adam
 Shakeel scored twice as many points as Imran
 Together they scored 39 points.

- (i) Write down, in terms of x , an expression for the number of points scored by Shakeel. (2)
- (ii) Write an equation which may be used to find the value of x . (2)

Total 12 marks

June 2005 – Question 3

- (a)



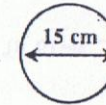
In the diagram shown above, the Universal set, (U), represents all the students in a class. The set M represents the students who take Music. The set D represents the students who take Drama. If 24 students take Music, calculate

- (i) the number of students who take BOTH Music and Drama
- (ii) the number of students who take Drama ONLY. (4)
- (b) A straight line passes through the point $P(-3, 5)$ and has a gradient of $\frac{2}{3}$.
- (i) Write down the equation of this line in the form $y = mx + c$. (5)
- (ii) Show that this line is parallel to the line $2x - 3y = 0$. (2)

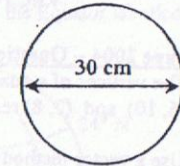
Total 11 marks

June 2005 – Question 4

The figures shown below, not drawn to scale, represent the cross sections of two circular pizzas. Both pizzas are equally thick and contain the same toppings.



Small pizza
Diameter = 15 cm



Medium pizza
Diameter = 30 cm

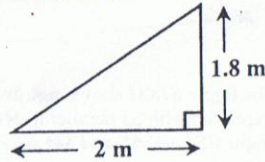
- (a) Is a medium pizza twice as large as a small pizza? Use calculations to support your answer. (5)
- (b) A medium pizza is cut into 3 equal parts, and each part is sold for \$15.95. A small pizza is sold for \$12.95. Which is the better buy? Use calculations to support your answer. (5)

Total 10 marks

June 2005 – Question 5

- (a) On graph paper, draw the x -axis and the y -axis. Using a scale of 1 cm to represent 1 unit on both axes, draw the triangle DEF with vertices $D(1, 1)$, $E(3, 1)$ and $F(1, 4)$. (3)
- (b) (i) Draw the image of $\triangle DEF$ under reflection in the line $x = 4$. Name the image $\triangle D'E'F'$.
- (ii) Draw the image of $\triangle D'E'F'$ under the translation $\begin{pmatrix} 0 \\ -5 \end{pmatrix}$. Name the image $\triangle D''E''F''$.
- (iii) Name the type of transformation that maps $\triangle DEF$ onto $\triangle D''E''F''$. (5)

- (c) A vertical stick of height 1.8 m casts a shadow of length 2 m on the horizontal as shown in the diagram below, not drawn to scale.

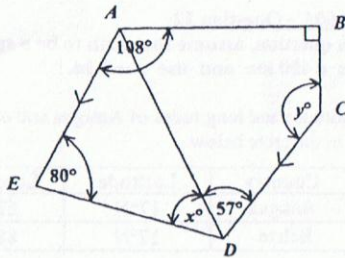


Calculate, to the NEAREST degree, the angle of elevation of the sun. (4)

Total 12 marks

June 2005 – Question 6

- (a) In the diagram shown below, $ABCDE$ is a pentagon. $\angle BAE = 108^\circ$, $\angle ABC = 90^\circ$, $\angle AED = 80^\circ$, $\angle ADC = 57^\circ$ and AE is parallel to CD .



Calculate the size of the angle marked

- (i) x°
(ii) y° (4)

Show all steps in your calculations and give reasons for your answers.

- (b) The functions f and g are defined by

$$f(x) = \frac{1}{2}x + 5, \quad g(x) = x^2.$$

Evaluate

- (i) $g(3) + g(-3)$
(ii) $f^{-1}(6)$
(iii) $fg(2)$ (8)

Total 12 marks

June 2005 – Question 7

The table below gives the distribution of heights of 400 female applicants for the Police Service.

Height (cm)	Number of Applicants	Cumulative Frequency
151 - 155	10	10
156 - 160	55	65
161 - 165	105	170
166 - 170	110	280
171 - 175	80	360
176 - 180	30	390
181 - 185	10	400

- (a) Using a horizontal scale of 2 cm to represent a height of 5 cm and a vertical scale of 2 cm to represent 50 applicants, draw a cumulative frequency curve of the heights.

Start your horizontal scale at 150 cm. (5)

- (b) Use your graph to estimate
- the number of applicants whose heights are less than 170 cm. (1)
 - the median height of applicants. (2)
 - the height that 25% of the applicants are less than (2)
 - the probability that an applicant selected at random has a height that is no more than 162 cm. (2)

Credit will be given for drawing appropriate lines on your graph to show how the estimates were obtained.

Total 12 marks

June 2005 – Question 8

- (a) Study the number pattern in the table below and complete lines (i), (ii) and (iii) in your answer booklet.

	2^3	$(0 \times 3^2) + (3 \times 2) + 2$	8
	3^3	$(1 \times 4^2) + (3 \times 3) + 2$	27
	4^3	$(2 \times 5^2) + (3 \times 4) + 2$	64
	5^3	$(3 \times 6^2) + (3 \times 5) + 2$	125
(i)	6^3		
(ii)	10^3		
(iii)	n^3	$(n-2) \times (\quad)^2 + (3 \times \quad) + 2$	n^3

(7)

- (b) Show that

$$(a-b)^2(a+b) + ab(a+b) = a^3 + b^3. \quad (3)$$

Total 10 marks

SECTION II

Answer TWO questions in this section.

Algebra and Relations, Functions And Graphs

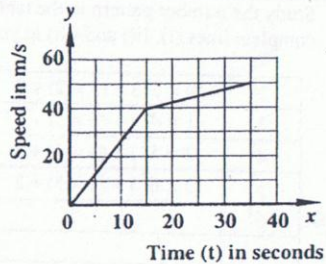
June 2005 – Question 9

- (a) Write $5x^2 + 2x - 7$ in the form $a(x+b)^2 + c$, where a , b , and c are real numbers. (4)
- (b) Hence, or otherwise, determine
- the minimum value of function $y = 5x^2 + 2x - 7$
 - the value of x at which the minimum occurs (3)
- (c) Find the values of x for which $5x^2 + 2x - 7 = 0$. (3)
- (d) Sketch the graph of $y = 5x^2 + 2x - 7$, clearly showing
- the coordinates of the minimum point
 - the value of the y -intercept
 - the points where the graph cuts the x -axis. (5)

Total 15 marks

June 2005 – Question 10

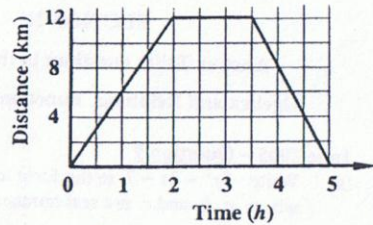
(a) The speed-time graph below shows the movement of a cyclist.



Using the graph, calculate

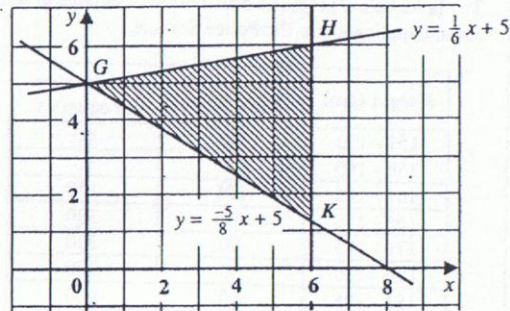
- (i) the acceleration of the cyclist during the first 15 seconds
- (ii) the distance traveled by the cyclist between the period $t = 15$ and $t = 35$ seconds. (6)

(b) The graph below represents the 5-hour journey of an athlete.



- (i) What was the average speed during the first 2 hours?
- (ii) What did the athlete do between 2 and 3 hours after the start of the journey?
- (iii) What was the average speed on the return journey? (5)

(c) The diagram below shows a triangular region bounded by the lines $y = \frac{1}{6}x + 5$, $y = -\frac{5}{8}x + 5$ and line HK .



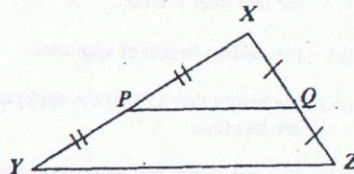
- (i) Write the equation of the line HK . (1)
- (ii) Write the set of three inequalities which define the shaded region GHK . (3)

Total 15 marks

GEOMETRY AND TRIGONOMETRY

June 2005 – Question 11

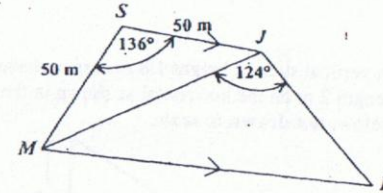
(a)



In the diagram above, **not drawn to scale**, P and Q are midpoints of the sides XY and XZ of triangle XYZ . Given that $XP = 7.5$ cm, $XQ = 4.5$ cm and the area of triangle $XPQ = 13.5$ cm², calculate

- (i) the size of angle PXQ , expressing your answer correct to the nearest degree.
- (ii) the area of triangle YXZ . (6)

(b)



The figure $SJKM$ above, **not drawn to scale**, is a trapezium with SJ parallel to MK , angle $MJK = 124^\circ$, angle $MSJ = 136^\circ$, and $SM = SJ = 50$ metres.

- (i) Calculate the size of
 - a) angle SJM
 - b) angle JKM . (3)
- (ii) Calculate, expressing your answer correct to ONE decimal place, the length of
 - a) MJ
 - b) JK . (6)

Total 15 marks

June 2005 – Question 12

In this question, assume the earth to be a sphere of radius 6 400 km and use $\pi = 3.14$.

The latitudes and longitudes of Antigua and of Belize are given in the table below.

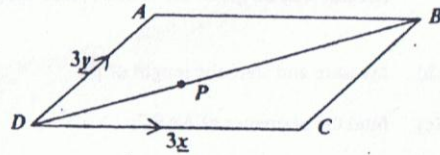
Country	Latitude	Longitude
Antigua	17°N	62°W
Belize	17°N	88°W

- (a) Draw a sketch of the earth showing the location of Antigua and of Belize, their associated circles of latitude and longitude, the equator, and the Greenwich Meridian. (6)
- (b) Calculate the shortest distance between Antigua and Belize measured along their common circle of latitude. (5)
- (c) A town, Bahia Blanka, situated in South America, lies on a meridian 62°W and has a latitude of 38°S. Calculate the shortest distance between Antigua and Bahia Blanka measured along the common circle of longitude. (4)

Total 15 marks

VECTORS AND MATRICES

June 2005 – Question 13



In the figure above, not drawn to scale, $ABCD$ is a parallelogram such that $\overline{DC} = 3\underline{x}$ and $\overline{DA} = 3\underline{y}$.

The point P is on DB such that $DP : PB = 1:2$.

(a) Express in terms of \underline{x} and \underline{y} :

(i) \overline{AB}

(ii) \overline{BD}

(iii) \overline{DP}

(5)

(b) Show that $\overline{AP} = \underline{x} - 2\underline{y}$.

(2)

(c) Given that E is the mid-point of DC , prove that A , P and E are collinear.

(4)

(d) Given that $\underline{x} = \begin{pmatrix} 2 \\ 0 \end{pmatrix}$ and $\underline{y} = \begin{pmatrix} 1 \\ 1 \end{pmatrix}$,

use a vector method to prove that triangle AED is isosceles.

(4)

Total 15 marks

June 2005 – Question 14

(a) Given that $M = \begin{pmatrix} 2 & 5 \\ 7 & 15 \end{pmatrix}$

(i) Show that M is a non-singular matrix.

(ii) Write down the inverse of M .

(iii) Write down the 2×2 matrix which is equal to the product $M \times M^{-1}$.

(iv) Pre-multiply both sides of the following matrix equation by M^{-1} .

$$\begin{pmatrix} 2 & 5 \\ 7 & 15 \end{pmatrix} \begin{pmatrix} x \\ y \end{pmatrix} = \begin{pmatrix} -3 \\ 17 \end{pmatrix}$$

Hence solve for x and y .

(7)

(b) (i) Write down the 2×2 matrix, R , which represents a reflection in the y -axis.

(ii) Write down the 2×2 matrix, N , which represents a clockwise rotation of 180° about the origin.

(iii) Write down the 2×1 matrix, T , which represents a translation of -3 units parallel to the x -axis and 5 units parallel to the y -axis.

(iv) The point $P(6, 11)$ undergoes the following combined transformations such that

$RN(P)$ maps P onto P'

$NT(P)$ maps P onto P''

Determine the coordinates of P' and P'' .

(8)

Total 15 marks